

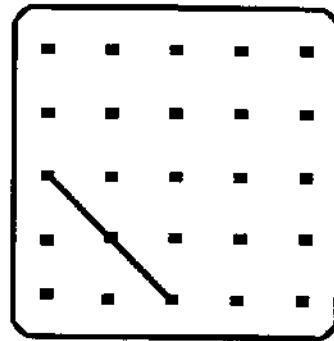
SUNSHINE MATH - 1
 Venus, III

Name: _____
 (This shows my own thinking.)

- ★ 1. I am a number. Subtract me from 12 and get 9.
 Who am I?

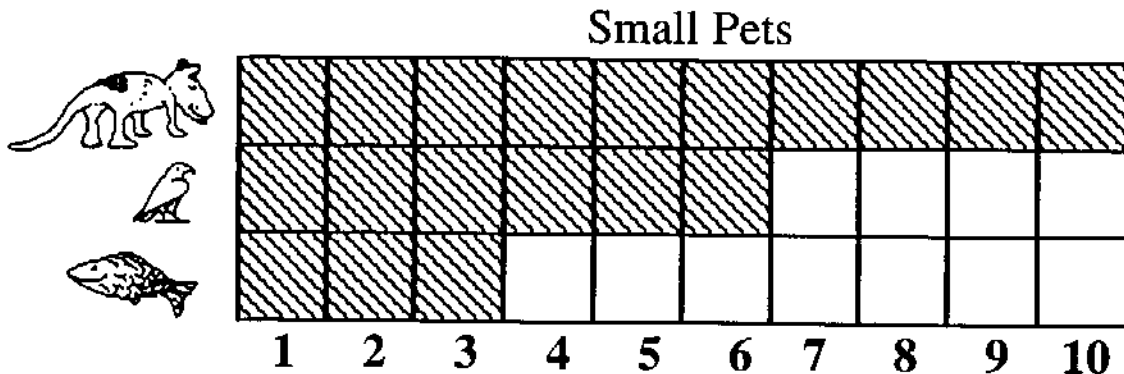
Answer: _____

- ★★★ 2. Draw a square in the box to the right. Begin with the part given.

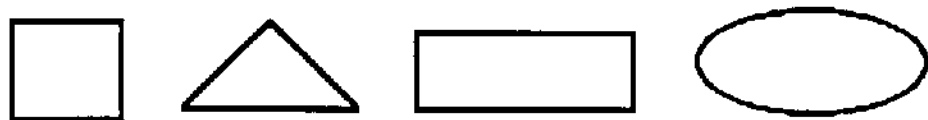


- ★★ 3. These are the favorite pets in a first grade class. How many more children liked dogs, than birds and fish together?

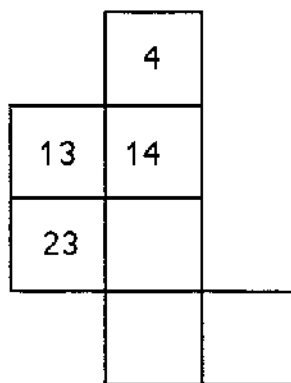
Answer: ____ more



- ★ 4. Four children each chose a shape. Jessica's shape is oval. Jane's shape has 4 corners and 4 sides the same length. Scott's shape has 3 sides. Which shape did Mark choose? Circle the answer.



- ★★★ 5. Write the missing numbers in this part of the hundreds chart.



- ★★★★6. Use these digits:

What is the least 2-digit number you can make? _____

What is the greatest 2-digit number? _____

- ★★★ 7. Complete the table.

Number of pencils	1	2	3	4	5	6	7
Amount you pay	3¢						

How much would 10 pencils cost? _____

