
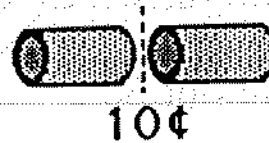


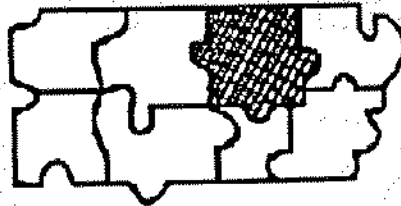
SUNSHINE MATH - 1
Venus, XIV

- ★★★★ 1. If it costs 10¢ to make 1 cut, how much does it cost to cut a log into 5 pieces?

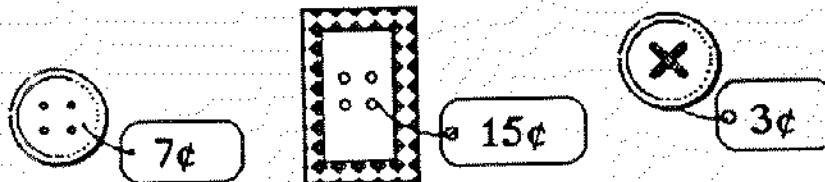
Answer: _____ ¢



- ★ 2. Look at the puzzle below, then circle the piece that will fit in the shaded area.




- ★★ 3. Circle the type of button that Keisha bought.
- The button costs more than a nickel, and
 - The button costs less than a dime.



- ★ 4. Bozo chewed a hole in Lu's homework. He chewed the numbers in the ones place, and the whole answer.


Circle the best *estimate* of the answer to the problem you can see.

- about 110
- about 60
- about 30




- ★★ 5. It takes 50 stars to make an American flag. If you laid 50 stars out in rows with 10 stars in each row, how many rows would you have?

Answer: ____ rows



- ★★ 6. A cat is asleep on a mat at a pet store. About how many curled-up cats can sleep on this mat, at one time?

Answer: about ____ cats



- ★★ 7. A kangaroo's tail is about as long as the kangaroo is tall. Draw the right size tail on this kangaroo.

