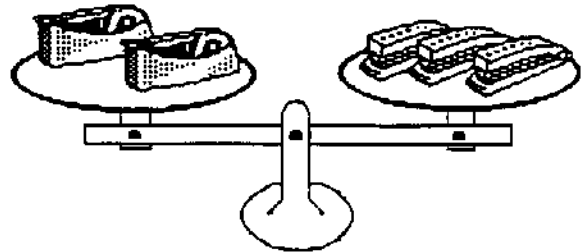


- ★ 1. If November 8th is Wednesday, what day of the week is November 16th?

Answer: _____

- ★★★ 2. Which weighs the most, a tape holder or a stapler?



Answer: _____
is heavier.

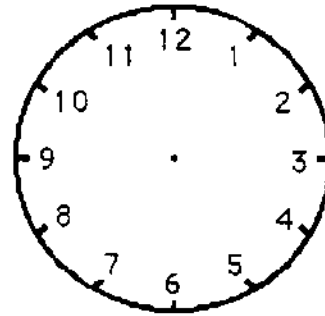
- ★★★ 3. Nancy saw a car, a van, and a truck cross a bridge. The truck crossed the bridge after the van. The car crossed the bridge before the van. In what order did the car, the van, and the truck cross the bridge?

Answer: First _____,
Second _____,
Third _____

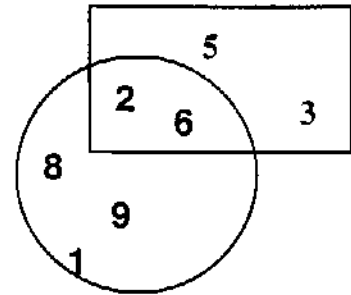
- ★★★ 4. Write the numbers in the boxes to make true statements. Use a calculator if it helps.

a. $46 - \square = 23$ b. $18 + \square = 30$ c. $\square - 14 = 24$

- ★ 5. Tamika gets home at 3:00. A half hour later she can go play outside. Draw the hands on the clock to show when she can go play.



- ★★★ 6. a. What is the sum of the numbers *not* in the rectangle? _____
- b. What is the sum of the numbers in *both* the rectangle and the circle? _____



- c. What is the sum of the numbers *in* the rectangle *but not in* the circle? _____

- ★★★ 7. Sally has 79¢. She bought an apple for 20¢ and a balloon for 19¢. How much did she have left?

Answer: _____¢

- ★★ 8. A lunch at Sunshine Elementary school costs 95¢. About how much would it cost to eat there for a whole school week? Circle the best answer below.

About \$2 About \$3 About \$4 About \$5