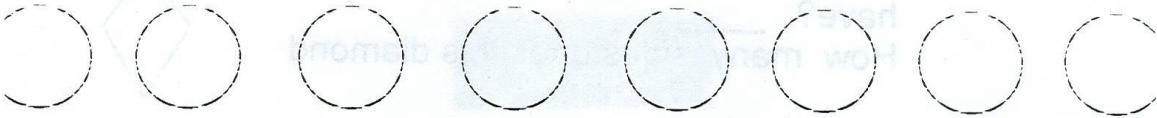


SUNSHINE MATH - K
Mercury, 12

* 1. _____
(First Name) (Last Name)

** 2. Color in every other circle:




** 3. How many bananas are there? _____



*** 3. If you gave a friend 2 muffins, and she ate 1 muffin, how many muffins would she have left?




*** 5. How many sides does this square



have? _____

How many sides does this triangle



have? _____

How many sides does this diamond





have? _____

*** 6. How many noses are there? _____

How many ears are there? _____

How many arms are there? _____



(Parents: Reading the problem to your child is ALWAYS okay. If you help them solve the problems please initial the problem and they will receive partial credit.)