



SUNSHINE MATH - K
Mercury, 15

* 1. _____

** 2. How many rays are
on this sun?



How many rays are
on this sun?



*3. Color the sun above that has less rays.

**** 4. _____

+	+	+	+	+	+	+			
#	#	#	#	#	#	#	#		
@	@	@							


How many + are there? _____

How many # are there? _____

How many @ are there? _____

Put a ✓ for each person in your family, in the bottom row.

***5. Look at a digital clock. Put numbers on the clock so the clock reads 12 o'clock.



**6. Draw a line from the problem to the correct answer.

5

●●●●●● - ● = ?

4

●●●●●●●● - ● = ?

3

●●●●●●●●● - ● = ?

●●●●●● - ● = ?

(Parents: Reading the problem to your child is ALWAYS okay. If you help them solve the problems, please initial the problem and they will receive partial credit.)